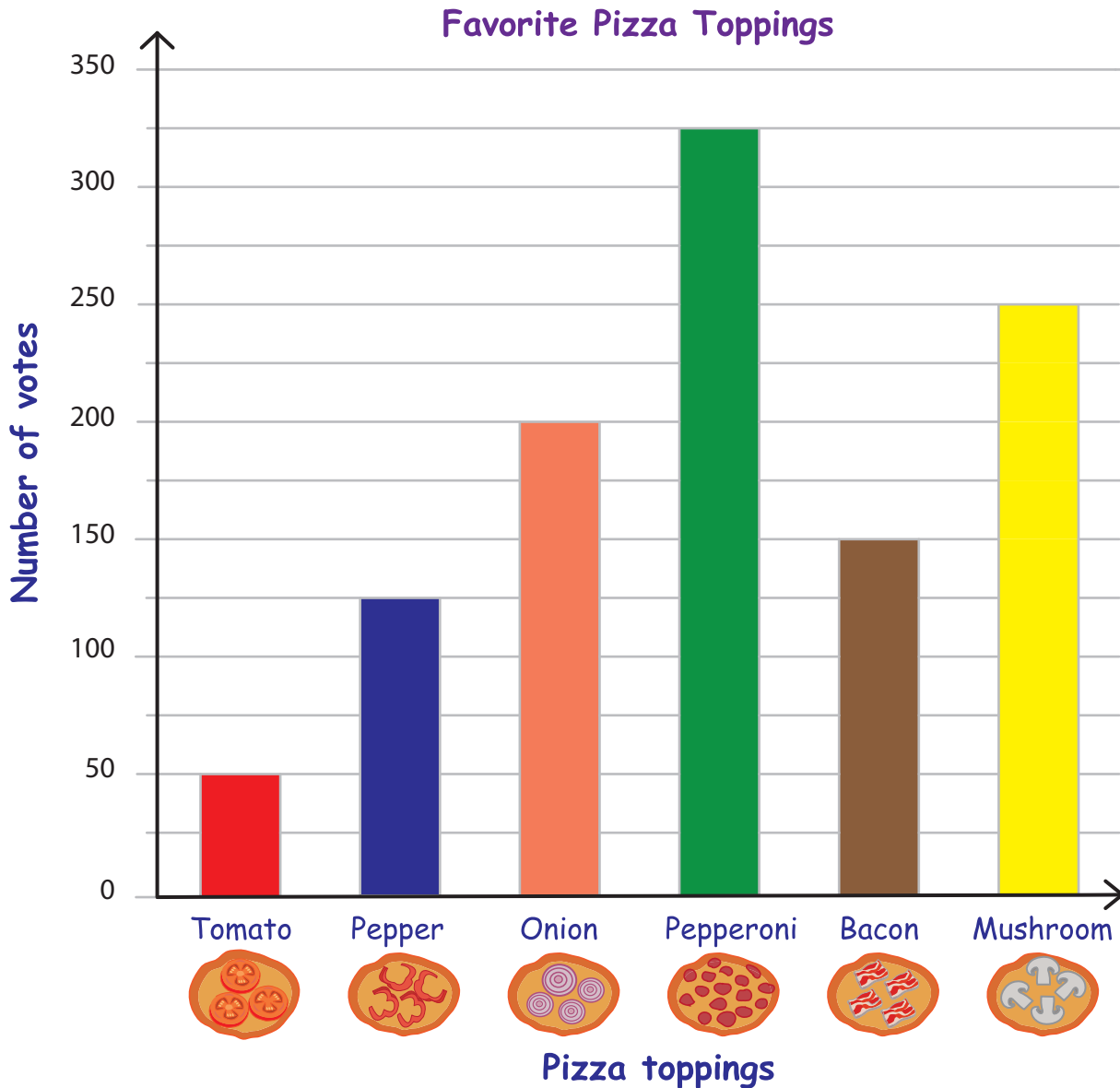


Bar Graph - Pizza Toppings

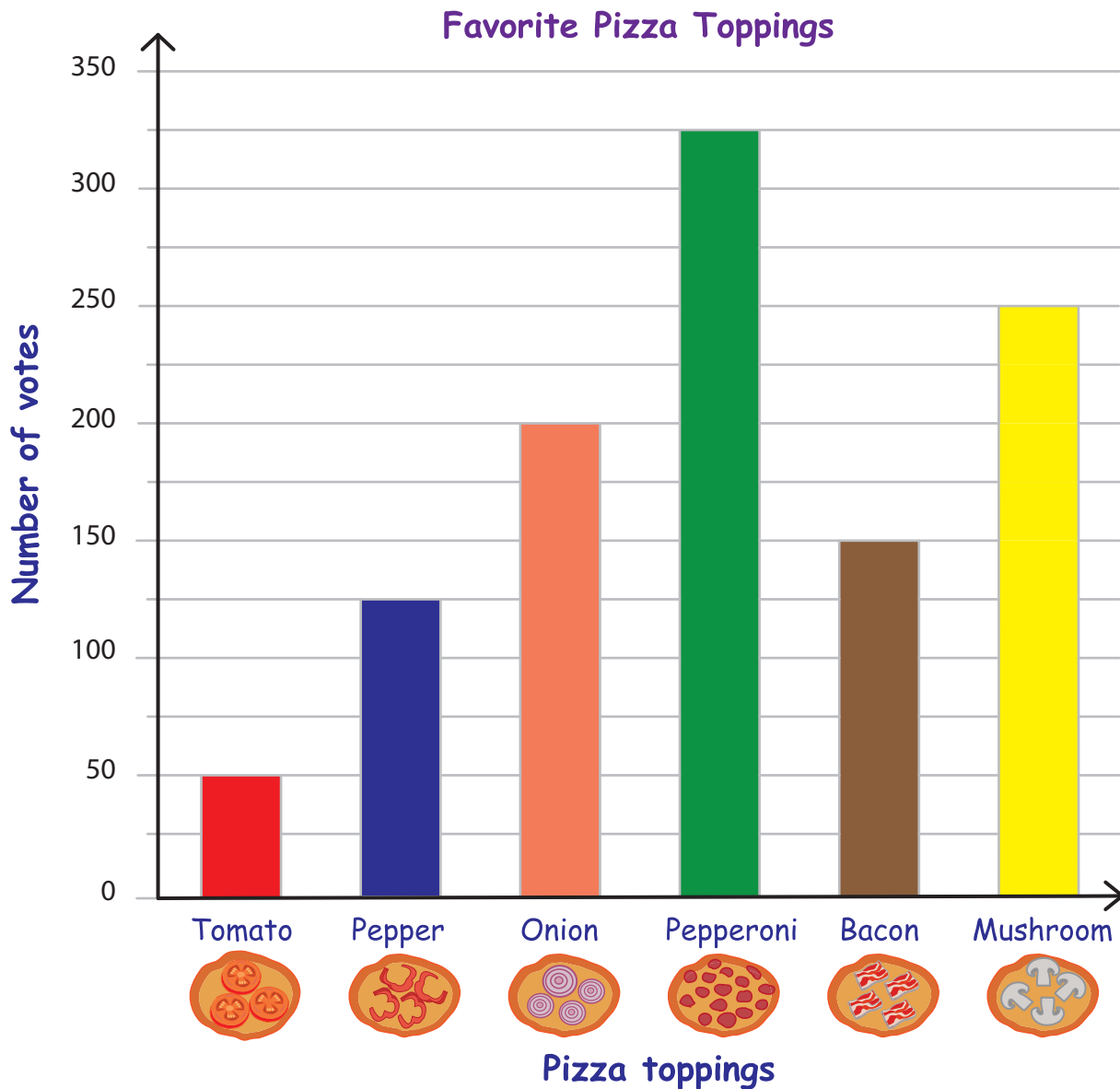
Good Time Pizza Makers are best in making pizzas with six different toppings. They took a survey about customers' favorite toppings and recorded the results in a bar graph. Use the bar graph to answer the questions.



- Which is the most popular topping? _____
- How many customers have chosen either tomato or pepper toppings? _____
- If 75 more customers prefer bacon, which one will top the chart, bacon or onion? _____
- Which topping has 250 votes? _____
- List the toppings in order from most popular to least popular.

Bar Graph - Pizza Toppings

Good Time Pizza Makers are best in making pizzas with six different toppings. They took a survey about customers' favorite toppings and recorded the results in a bar graph. Use the bar graph to answer the questions.



1) Which is the most popular topping?

Pepperoni

2) How many customers have chosen either tomato or pepper toppings?

175

3) If 75 more customers prefer bacon, which one will top the chart, bacon or onion?

Bacon

4) Which topping has 250 votes?

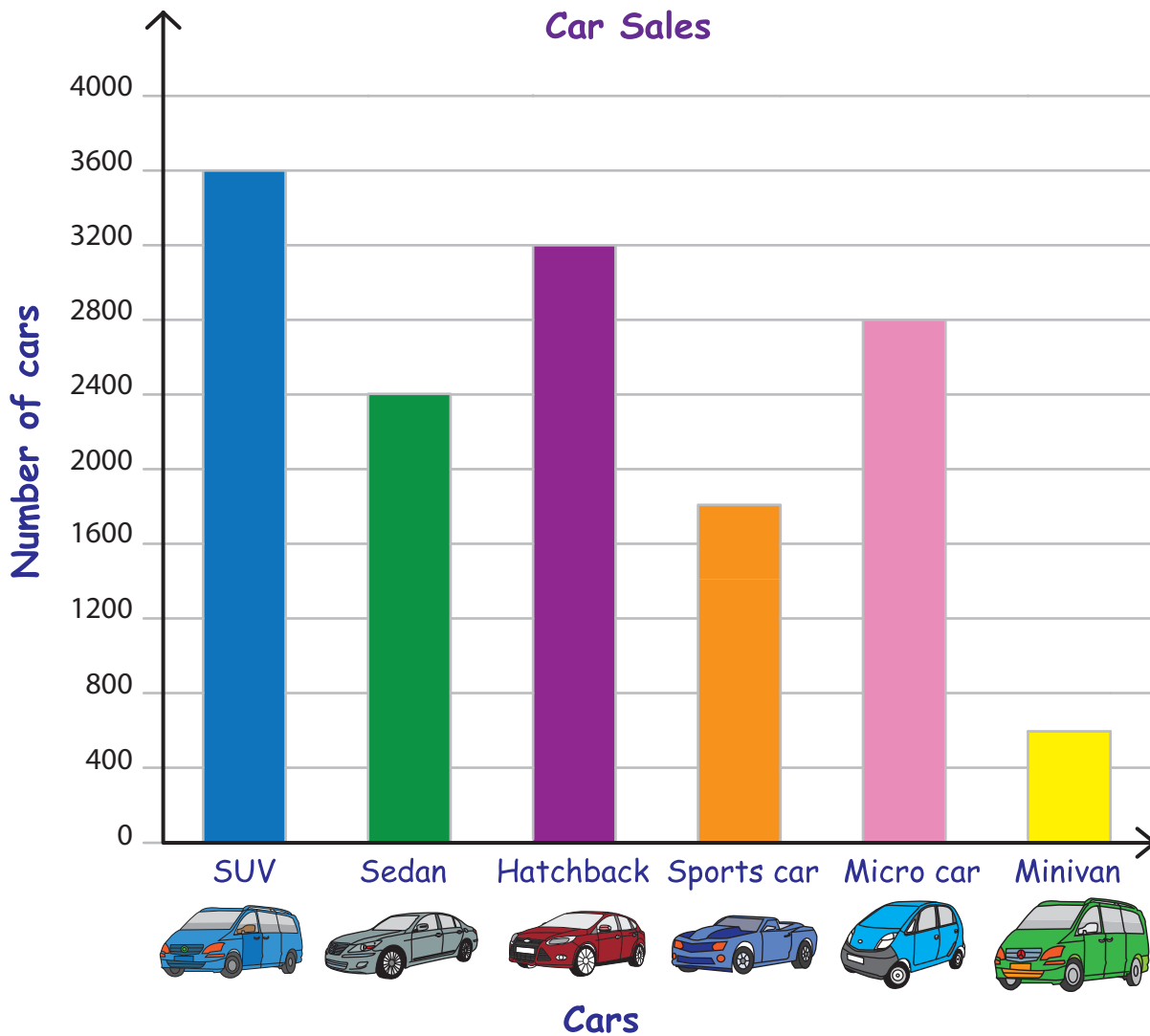
Mushroom

5) List the toppings in order from most popular to least popular.

Pepperoni, Mushroom, Onion, Bacon, Pepper and Tomato

Bar Graph - Car Sales

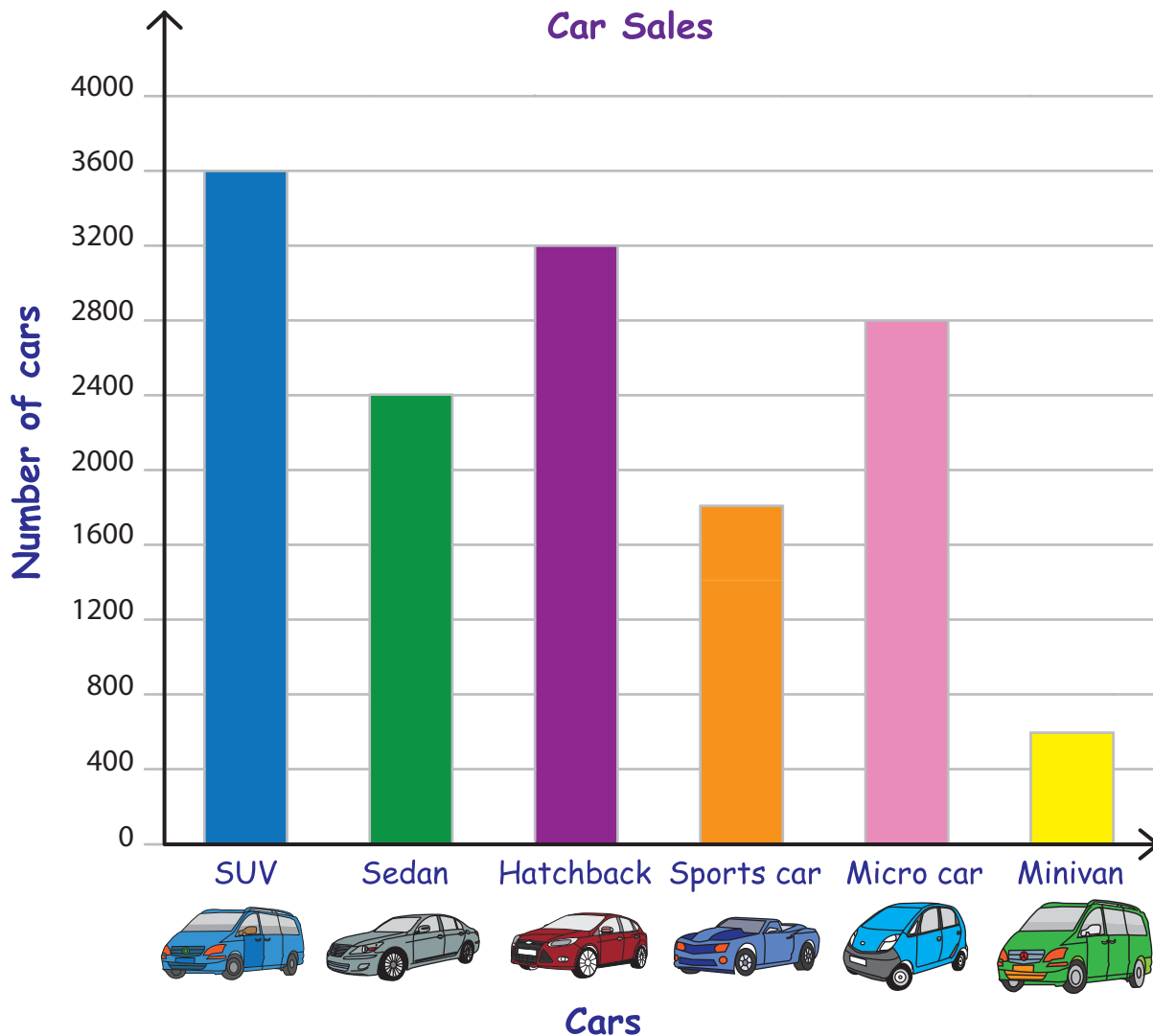
A survey is conducted on the number of cars sold by Mathew's Cars in 2013. The information is recorded in a bar graph. Use the graph to answer the questions.



- 1) Which type of car was sold the most? _____
- 2) How many fewer sports cars were sold than hatchbacks? _____
- 3) How many more SUV cars were sold than Sedans? _____
- 4) The sales of sports cars and minivans putting together equals the sales of _____
- 5) Find the number of cars sold in all. _____

Bar Graph - Car Sales

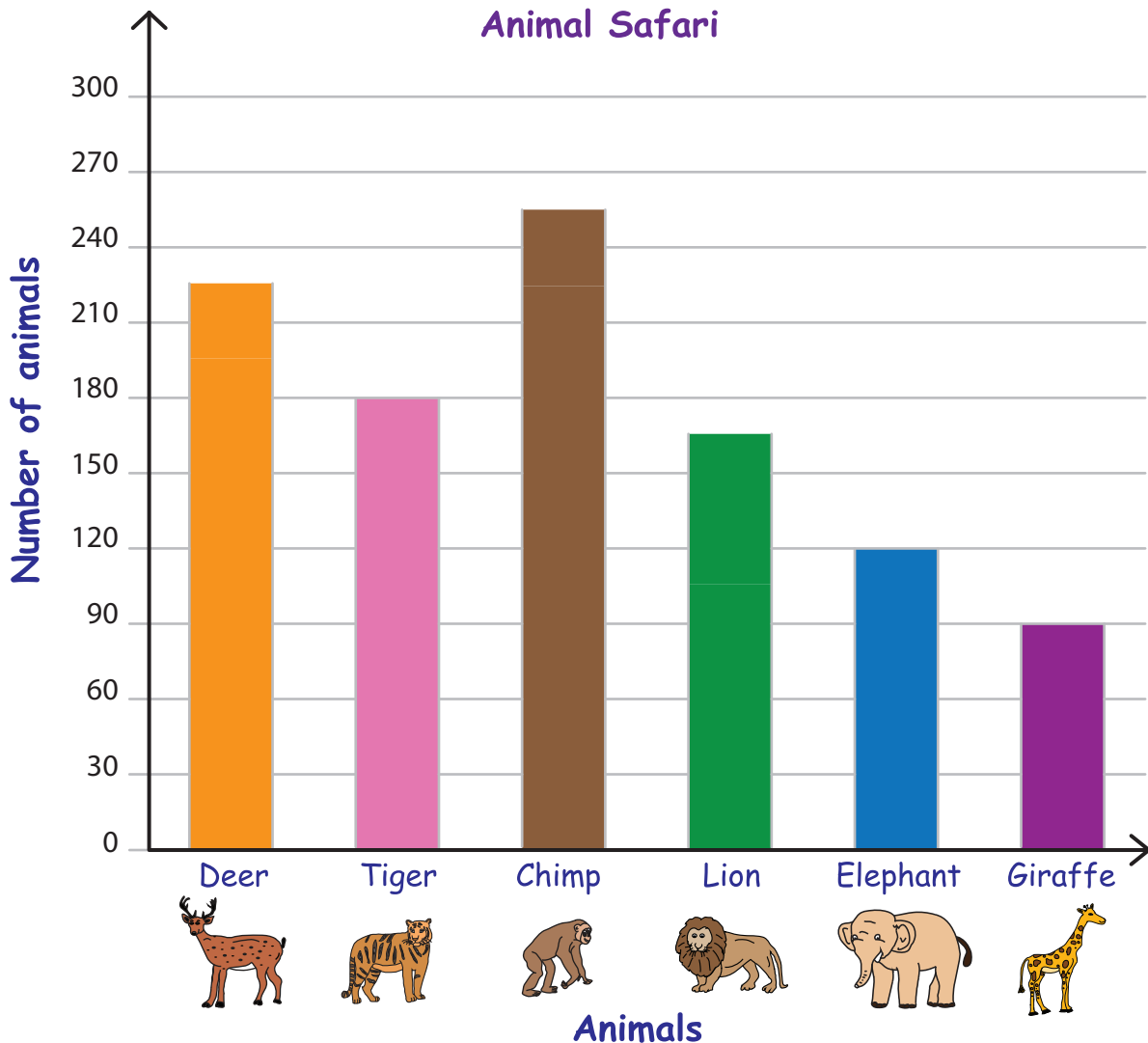
A survey is conducted on the number of cars sold by Mathew's Cars in 2013. The information is recorded in a bar graph. Use the graph to answer the questions.



- 1) Which type of car was sold the most? SUV
- 2) How many fewer sports cars were sold than hatchbacks? 1400
- 3) How many more SUV cars were sold than Sedans? 1200
- 4) The sales of sports cars and minivans putting together equals the sales of Sedan
- 5) Find the number of cars sold in all. 14,400

Bar Graph - Animal Safari

Henry Ford Zoo, a drive-through safari invites visitors to spend the day with six types of animals, including various activities like feeding, bathing and more. The graph shows the number of animals in each kind. Use the graph to answer the questions.



1) Write a number at the end of each bar to display the number of animals of each kind.

2) Are there more Chimps or Deer? _____

3) Which animal is double the count of Giraffe? _____

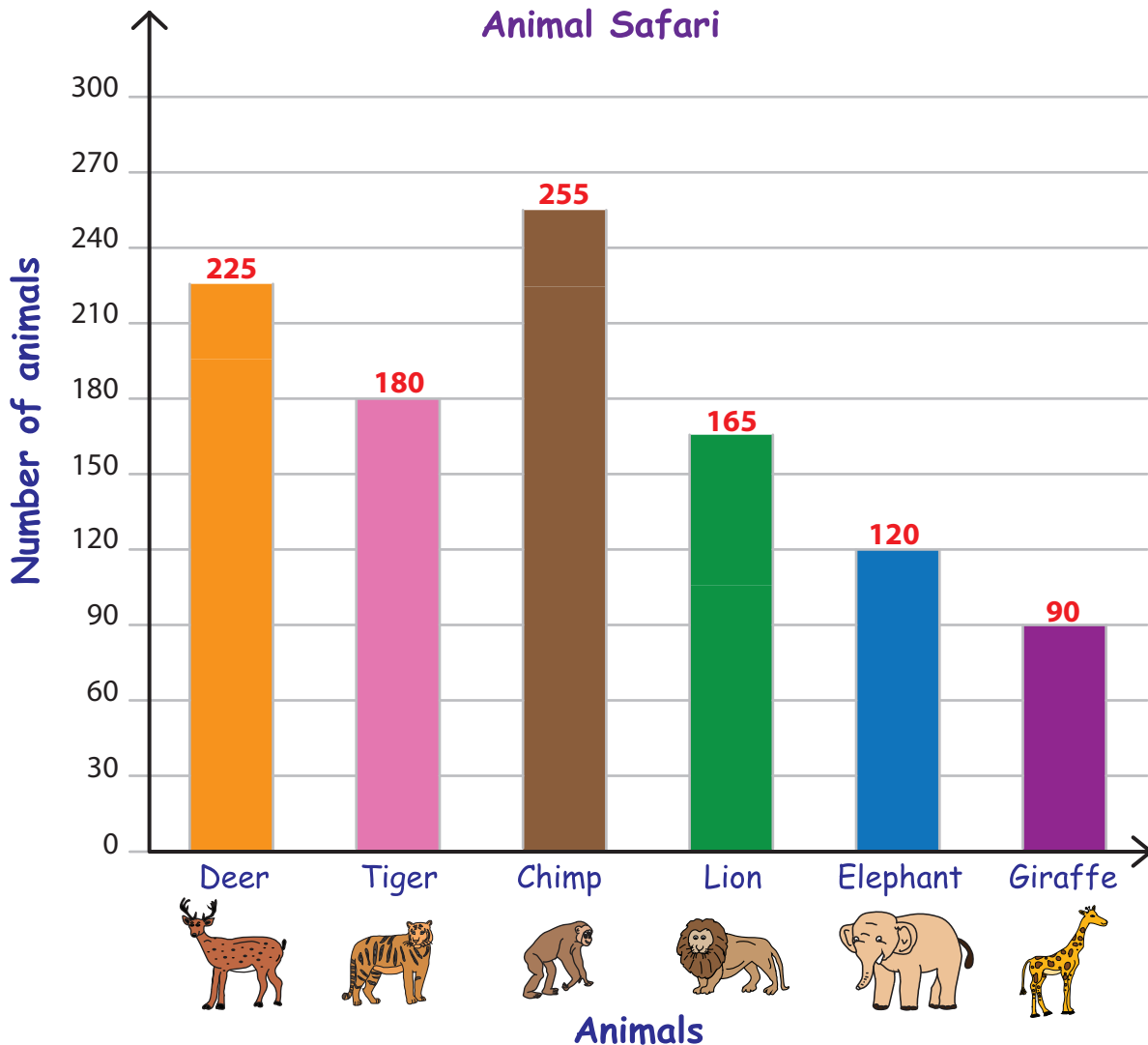
4) How many more elephants are required to have an equal number of lions? _____

5) Henry Ford's zoo made an exchange deal with Saint Peter's zoo. They exchanged 10 tigers, 5 lions and 15 chimps for 9 elephants, 15 deer and 5 giraffes. What would be the new count of animals in each kind?

Deer: _____ ; Tiger: _____ ; Chimp: _____ ; Lion: _____ ; Elephant: _____ ; Giraffe: _____

Bar Graph - Animal Safari

Henry Ford Zoo, a drive-through safari invites visitors to spend the day with six types of animals, including various activities like feeding, bathing and more. The graph shows the number of animals in each kind. Use the graph to answer the questions.



1) Write a number at the end of each bar to display the number of animals of each kind.

2) Are there more Chimps or Deer?

Chimps

3) Which animal is double the count of Giraffe?

Tiger

4) How many more elephants are required to have an equal number of lions?

45

5) Henry Ford's zoo made an exchange deal with Saint Peter's zoo. They exchanged 10 tigers, 5 lions and 15 chimps for 9 elephants, 15 deer and 5 giraffes. What would be the new count of animals in each kind?

Deer: 240 ; Tiger: 170 ; Chimp: 240 ; Lion: 160 ; Elephant: 129 ; Giraffe: 95